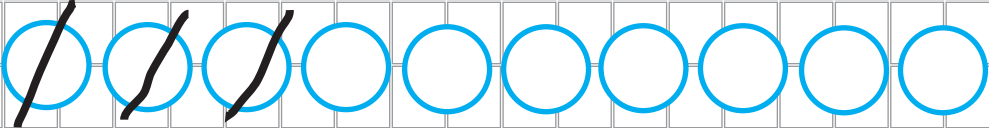
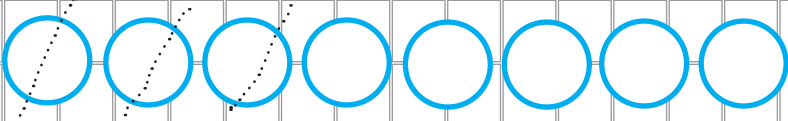


# Restas

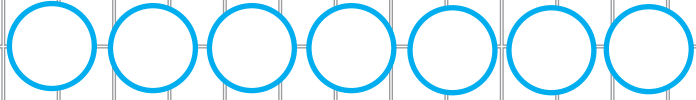
 TACHA LOS  QUE VAS A RESTAR Y ESCRIBE CUANTOS SOBRAN

$\begin{array}{r} 10 \\ - 3 \\ \hline 7 \end{array}$	
--	--

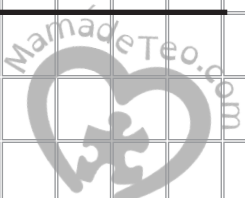
---

$\begin{array}{r} 8 \\ - 3 \\ \hline 5 \end{array}$	
---	--

---

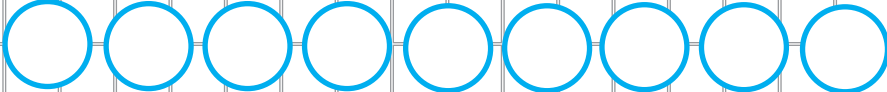
$\begin{array}{r} 7 \\ - 4 \\ \hline \end{array}$	
---	--

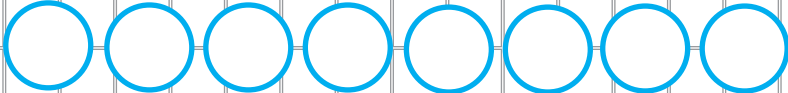
---





# Restas

 TACHA LOS  QUE VAS A RESTAR Y ESCRIBE CUANTOS SOBRAN

$$\begin{array}{r} 9 \\ - 4 \\ \hline \end{array}$$


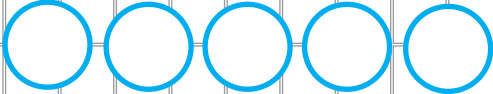
$$\begin{array}{r} 8 \\ - 7 \\ \hline \end{array}$$


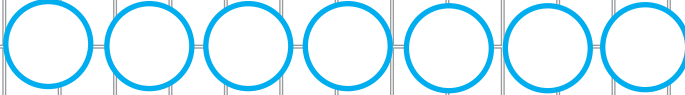
$$\begin{array}{r} 7 \\ - 6 \\ \hline \end{array}$$




# Restas

 TACHA LOS  QUE VAS A RESTAR Y ESCRIBE CUANTOS SOBRAN

$$\begin{array}{r} 5 \\ - 4 \\ \hline \end{array}$$


$$\begin{array}{r} 7 \\ - 2 \\ \hline \end{array}$$


$$\begin{array}{r} 8 \\ - 1 \\ \hline \end{array}$$
